

1

a) Draw **half** the number of shapes in the picture.



b) Draw **one third** of the number of shapes in the picture.




c) Draw **one quarter** of the number of shapes in the picture.



2

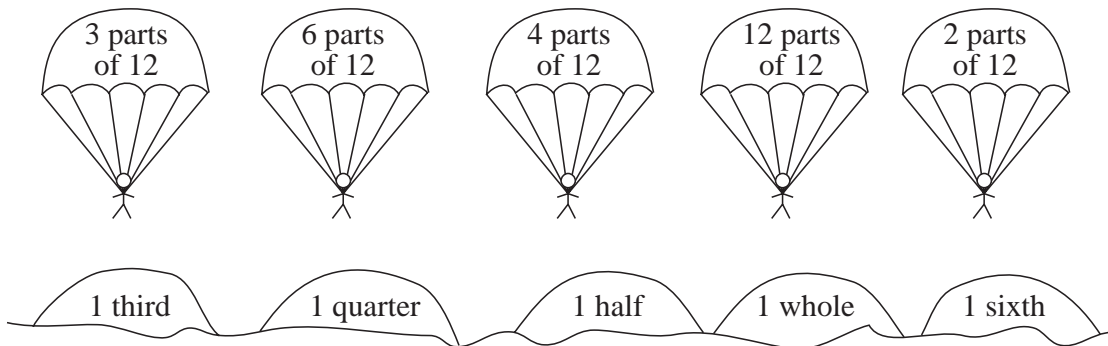
There are 6 bananas in this bunch. Draw the bananas and fill in the number.



- a) **1 half** of the bunch
- b) **1 third** of the bunch
- c) **1 sixth** of the bunch

3

Where will the parachutes land? Join them up to the correct hills.



4

Draw how many dumplings there are and write the amount in the box if:


- a) ● ● ● ● ● is **1 half** of
- b) ● is **1 fifth** of
- c) ● ● ● ● is **1 third** of
- d) ● ● is **1 quarter** of

5

Draw a line 12 cm long and divide it into **thirds**. Each **third** is cm.

1

Four mice have found a lump of cheese.
Draw where they should cut it so that they each have an equal amount.

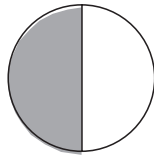


Each mouse has of the cheese.

2

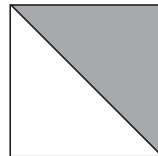
Write below each shape what part of it is shaded.

a)



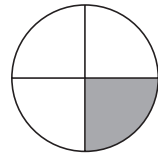
.....

b)



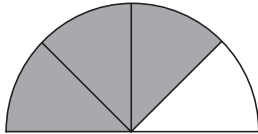
.....

c)



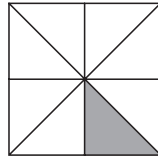
.....

d)



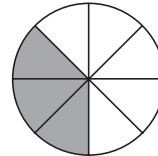
.....

e)



.....

f)



.....

3

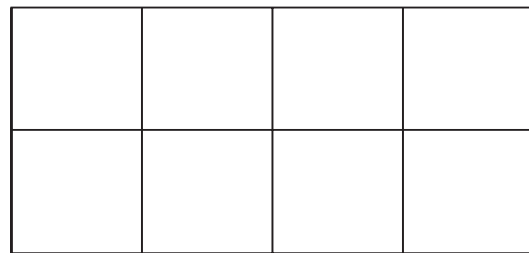
a) We have planted *red* roses in **2 eighths** of the garden. Colour it *red*.

b) We have planted *blue* forget-me-nots in **3 eighths** of the garden. Colour it *blue*.

c) We have planted grass in **2 eighths** of the garden. Colour it *green*.

d) Our house is built on the remaining part of the garden. Draw it in.

What part of the garden does the house take up?



4

Tortoise and Snail are having a race. Colour the animal who is ahead.



has covered **1 quarter** of 1 metre:



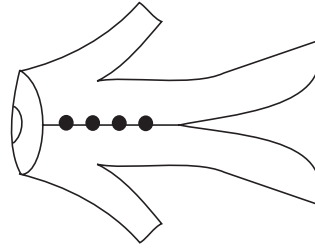
has covered **3 fifths** of 50 cm:

1

These things belong to a clown.

Colour:

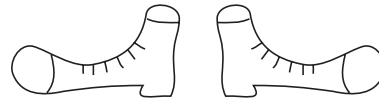
a) **1 half** of his coat *yellow*



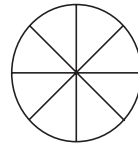
b) **3 quarters** of his stick *green*



c) **1 half** of the pair of shoes *blue*
and the other **half** *red*



d) **5 eighths** of his cake *brown*.



2


Complete the sentences by drawing or writing.

a)  is 1 third of

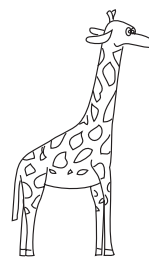
b)  is of 

c)  is of 

3



drank 24 litres
of water.



drank **3 quarters**
of that amount.

How much water did they drink altogether?

Calculation:


Answer: litres

4


Draw a line of length 8 cm. Draw over **3 quarters** of it in *red*.

1

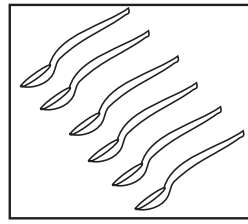
Colour:



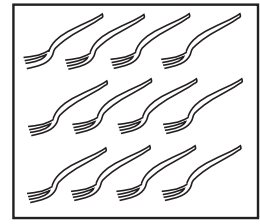
2 thirds



1 quarter



2 sixths



3 quarters

2

Draw how many nuts there are if:

a)  is 1 quarter

b)  is 3 eighths

c)  is 2 sixths

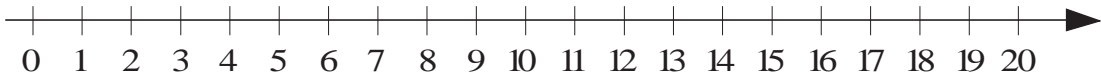
3

Join up the values to the corresponding points on the number line. 

1 fifth of 15

2 times 8

2 halves of 6



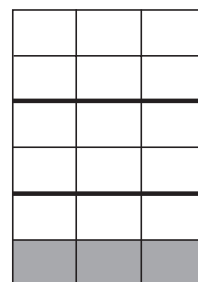
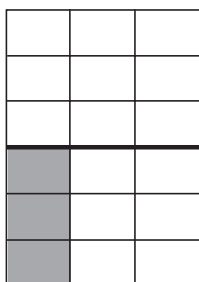
2 quarters of 8

1 half of 0

3 quarters of 20

4

Compare the shaded parts. Which is more? Write in the correct sign.


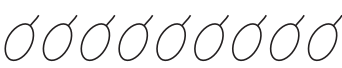
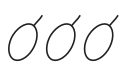
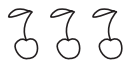


1 third of a half

1 half of a third

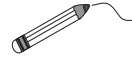
1



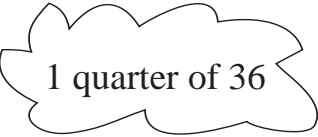
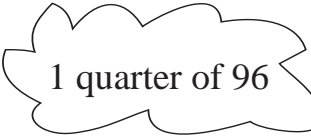




Complete the sentences by drawing or writing.

- a) 1 half of  is
- b) 1 of  is  3
- a) 1 quarter of is  3

2

Join up the clouds which show the same numbers.



 1 half of 48	 1 half of 8
 1 quarter of 36	 1 quarter of 96
 2 eighths of 16	 1 third of 18
 2 thirds of 9	 3 ninths of 27

3

Write the answers as Roman numerals.

- a) 1 half of XX = b) 2 ninths of XVIII =
- c) 3 quarters of XL = d) 3 fifths of XX =

4

Colour:

a) **1 third** of this grid



b) **2 fifths** of this grid



c) **3 quarters** of this grid



d) **1 third** of this grid






1

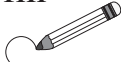
Sally and Susy Squirrel want to divide up the acorns they collected so that they both have an equal amount.






How could they do it? Complete the table.


Number of 	10	8	11	15	18	7	16		
 each	5							6	8
 remaining	0							1	0

2

We want to put 3 flowers into each vase. How many vases will we fill and how many flowers will remain? Fill in the missing numbers. 

		
$12 = 3 \times \square + \triangle$	$13 = 3 \times \square + \triangle$	$14 = 3 \times \square + \triangle$

3

A toy shop bought 35 teddy bears. The shop assistant could fit only 3 bears on each shelf. She put the remainder in the window. 

How many shelves were used? How many bears were put in the window?

Answer:

4

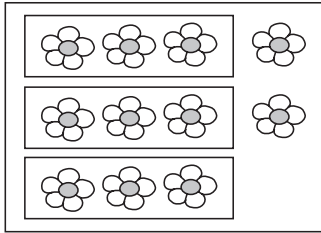
Fill in the missing numbers.

- | | | |
|-------------------------------|-------------------------------|-------------------------------|
| a) $40 + \square\square = 60$ | b) $\square\square + 50 = 80$ | c) $30 + \square\square = 50$ |
| $46 + \square\square = 66$ | $\square\square + 50 = 85$ | $38 + \square\square = 58$ |
| $40 + \square\square = 69$ | $\square\square + 57 = 87$ | $\square\square + 28 = 58$ |
| $70 - \square\square = 41$ | $\square\square - 36 = 24$ | $\square\square - 48 = 42$ |
| $66 - \square\square = 45$ | $\square\square - 6 = 58$ | $92 - \square = 84$ |
| $75 - \square\square = 46$ | $\square\square - 36 = 28$ | $\square\square - 48 = 44$ |

1

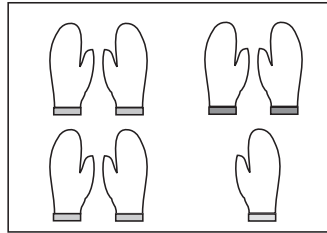
What do the pictures tell us? Write equations about them.

a)




.....

b)



.....

c)



.....

2

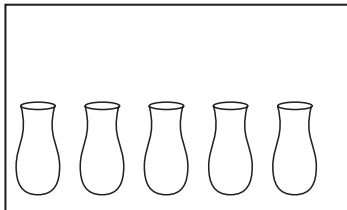
Alice has been given some flowers. She wants to put 3 flowers in each vase. How many vases will she fill and how many flowers remain?

Draw in the flowers and write equations about the pictures, if she had:

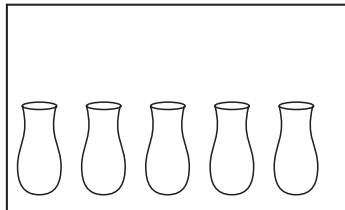
a) 13 flowers

b) 14 flowers

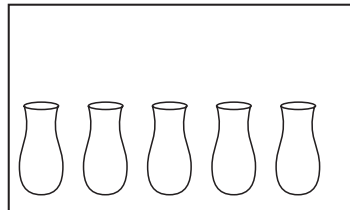
c) 15 flowers



.....



.....



.....

3

A photo album can hold only 4 photos on each page. How many pages will be filled and how many photos will remain if there are:

a) 24 photos

b) 25 photos

c) 26 photos

d) 27 photos?

.....
 remainder remainder remainder remainder

4

a) $27 + 35 = 28 + \square\square$

b) $73 - 47 = 74 - \square\square$

$34 + 39 = 24 + \square\square$

$92 - 35 = 82 - \square\square$




$68 + 19 = \square\square + 18$

$85 - 49 = \square\square - 46$

1

Write in the missing numbers. Draw pictures to match the calculations.

a) $3 \times 5 + 1 = \square$ b) $3 \times 5 + 4 = \square$ c) $\square \times 5 + \square = 18$






$\square \div 5 = \square$
remainder \square

$\square \div 5 = \square$
remainder \square

$18 \div 5 = \square$
remainder \square

2

Grandad wants to put his 35 rabbits into hutches, with an equal number of rabbits in each hutch. Complete the table.

Number of 	35	35	35	35	35	35	35	35	35	35
 per hutch	2	3	4	5	6	7	8	9	10	
hutches										
 remaining										

3

The children were playing a game and had to stand in rows. If they stood 2, 3 or 4 in a row, there was always 1 child left out.

What was the smallest possible number of children who played the game? Try these numbers. Write a **X** or a **✓** to show whether they are possible.

2	3	4	5	6	7	8	9	10	11	12	13	14	15	Answer:
X	X													<input type="text"/>

4

Fill in the missing numbers.

a) $\square\square + 30 = 95$ b) $70 - \square\square = 50$ c) $68 - \square\square = 25$

$35 + \square\square = 49$ $\square\square - 30 = 30$ $\square\square - 16 = 32$

$\square\square + 4 = 76$ $85 - \square\square = 55$ $92 - \square\square = 81$



A school was taking its pupils on a trip on a steam railway.
The carriages in the train were so small that they could seat only 6 people.
Complete the table to show how many carriages were needed.

Number of								
Children	24	25	26	27	28	29	30	
Full carriages								
Children remaining								




How many weeks and days are there in each month? Fill in the table.

	Months											
	Jan	Feb	Mar	Apr	May	Jun	Jul	Aug	Sep	Oct	Nov	Dec
Number of days												
Number of weeks												
plus extra days												



A train had carriages which could seat 8 people. Three carriages were full and the 4th carriage was half full.

How many passengers were on the train ?



Calculation:

Answer:



Practise calculation.

a) $18 + 6 = \square \square$

b) $6 \times 4 = \square \square$

c) $24 + \square \square = 36$

$36 + 8 = \square \square$

$3 \times 7 = \square \square$

$18 + \square \square = 54$

$48 + 5 = \square \square$

$9 \times 6 = \square \square$

$\square \square - 24 = 18$

$54 - 9 = \square \square$

$24 \div 6 = \square \square$

$\square \square - 18 = 38$

$36 - 8 = \square \square$

$35 \div 5 = \square \square$

$27 \div \square = 3$

$60 - 4 = \square \square$

$48 \div 6 = \square \square$

$\square \square \div 8 = 9$

1

There are 24 children in the class. The teacher wants to divide them into equal sized groups. In how many ways can she do it? Complete the table.

Number in each group	2	3	4	5	6	7		
Number of groups	12							
Children left out	0							

2

This is a special **magic square**.

The numbers along each row, column and diagonal add up to 34.

Fill in the missing numbers.

Look for other numbers in the square which add up to 34.

1	14		12
15			6
	5	16	
		2	13

3

Fill in the missing **digits**.

a) $3 \square + \square 4 = 80$

b) $4 \times \square = \square 0$

c) $\square 7 - 3 \square = 22$

d) $\square 0 \div 9 = 1 \square$

4

Use the digits 1, 2, 3 and 4 to make pairs of 2-digit numbers.

Each digit can be used only once in every pair, but can be in any order.

An example of such a pair is: 21 and 34.

a) Which pairs have the largest **sum**? $\square \square + \square \square = \square \square$

and $\square \square + \square \square = \square \square$

b) Which pairs have the smallest **difference**? $\square \square - \square \square = \square \square$

and $\square \square - \square \square = \square \square$

5

A bus is allowed to carry only 16 passengers. There are 9 people waiting at the bus stop. The first bus to stop is half full.



How many people will be left at the bus stop?

1

In a farmyard there are hens and rabbits. They have 52 legs altogether. How many hens and how many rabbits could there be in the farmyard?

Complete the table. Write calculations for some of the columns.

Number of

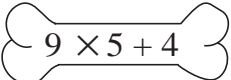
	12		10	2														
		10																

Calculations:


.....

2

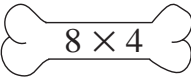
Match up the dogs to their bones. Join them up or colour them. 




$9 \times 5 + 4$



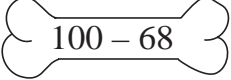
49



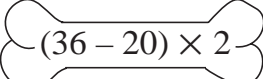
8×4



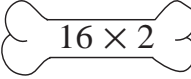
32



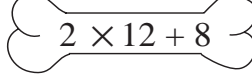
$100 - 68$



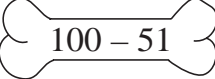
$(36 - 20) \times 2$



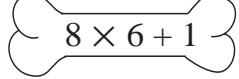
16×2



$2 \times 12 + 8$



$100 - 51$



$8 \times 6 + 1$

3

Practise multiplication.

- | | | |
|---------------------------|----------------------------|---------------------------|
| a) $9 \times 9 = \square$ | b) $10 \times 8 = \square$ | c) $1 \times 8 = \square$ |
| $6 \times 5 = \square$ | $3 \times 2 = \square$ | $9 \times 7 = \square$ |
| $8 \times 8 = \square$ | $1 \times 4 = \square$ | $2 \times 9 = \square$ |
| $10 \times 7 = \square$ | $5 \times 5 = \square$ | $4 \times 5 = \square$ |
| $7 \times 8 = \square$ | $7 \times 7 = \square$ | $21 \times 3 = \square$ |

4

Practise addition and subtraction.

- | | | |
|-----------------------|-----------------------|-----------------------|
| a) $56 + 7 = \square$ | b) $26 + 9 = \square$ | c) $35 - 7 = \square$ |
| $26 + 8 = \square$ | $15 + 72 = \square$ | $81 - 6 = \square$ |
| $39 + 5 = \square$ | $4 + 38 = \square$ | $76 - 9 = \square$ |
| $7 + 68 = \square$ | $92 - 5 = \square$ | $57 - 8 = \square$ |
| $5 + 48 = \square$ | $52 - 4 = \square$ | $48 - 9 = \square$ |




11

Write in the suitable signs. (+, -, ×, ÷)

a) $40 \square 4 \square 5 = 2$ b) $40 \square 4 \square 5 = 49$
 $40 \square 4 \square 5 = 15$ $40 \square 4 \square 5 = 50$
 $40 \square 4 \square 5 = 60$ $40 \square 4 \square 5 = 31$

22

What is the connection between the shapes? Complete the table.
 Write the rule in different ways.

	5	6	1	7				8	1
	4	3	4	1	3	2	9		2
	18	18	10		12	16	20	22	

$\text{moon} =$

$\text{star} =$

$\text{sun} =$

33

Practise addition and subtraction.

a) $36 + 18 = \square \square$ b) $76 + 16 = \square \square$ c) $65 - 29 = \square \square$
 $25 + 29 = \square \square$ $33 + 29 = \square \square$ $52 - 36 = \square \square$
 $56 + 17 = \square \square$ $44 + 28 = \square \square$ $57 - 19 = \square \square$
 $47 + 35 = \square \square$ $72 - 35 = \square \square$ $48 - 29 = \square \square$
 $34 + 29 = \square \square$ $61 - 27 = \square \square$ $86 - 38 = \square \square$
 $29 + 39 = \square \square$ $83 - 58 = \square \square$ $94 - 77 = \square \square$

44

Practise multiplication.

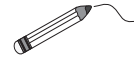
a) $\square = 6 \times 9$ b) $\square = 10 \times 3$ c) $\square = 2 \times 0$
 $\square = 10 \times 2$ $\square = 0 \times 9$ $\square = 1 \times 3$
 $\square = 10 \times 1$ $\square = 4 \times 8$ $\square = 0 \times 4$
 $\square = 6 \times 6$ $\square = 8 \times 6$ $\square = 5 \times 7$
 $\square = 7 \times 2$ $\square = 1 \times 9$ $\square = 7 \times 3$
 $\square = 3 \times 0$ $\square = 2 \times 1$ $\square = 10 \times 5$

1

I am going to toss a coin once. How certain can I be of the result?
Join up the statements on the left to the correct labels on the right.

I will throw a head.

Certain



I will throw a tail.

Possible, but not certain

I will throw a head **and** a tail.

Impossible

I will throw a head **or** a tail.

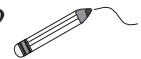
2

Throw a dice on your desk 10 times. Keep a tally of the numbers thrown in the table. Fill in the last column to show how often you threw each number.

	Throws										
	1st	2nd	3rd	4th	5th	6th	7th	8th	9th	10th	Total
• 1											
• • 2											
• • • 3											
• • • • 4											
• • • • • 5											
• • • • • • 6											

3

I am going to throw a dice once. How certain can I be of the result?
Join up the statements at the sides to the correct labels in the middle.



I will throw a 4.

Certain

I will throw a number < 3 .

I will throw a 2 or a 6.

Possible, but not certain

I will throw a number < 1 .

I will throw a 1 and a 5.

I will throw an even number.

I will throw a 7.

Impossible

I will throw a number < 9 .

4

I am going to toss a coin twice.
Write the possible results in the table.

	Throws	
	1st throw	2nd throw
Head		
Tail		

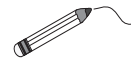
1

There are 2 white, 2 black and 2 striped marbles in a bag. The bag is tied with cord and you cannot see inside.



Join up the the statements on the left to the labels on the right.

How certain can I be that if, with my eyes shut:



- a) I take out 1 marble, it will be black.
- b) I take out 2 marbles, they will be the same colour.
- c) I take out 2 marbles, they will be different colours.
- d) I take out 5 marbles, at least 2 of them will be the same colour.
- e) I take out 4 marbles, they will all be different colours.

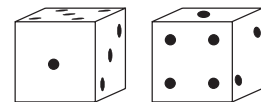
Certain

Possible but not certain

Impossible

2

- a) If we were to throw 2 dice at the same time, how many different results could there be?



Continue writing them out, with **A**'s number first.

1 + 6, 1 + 5, 1 + 4,


.....

.....

- b) Which total is: i) the smallest possible
- ii) the largest possible?

3

We have put 5 red, 5 yellow and 5 green marbles into a bag. The bag is tied with cord and you cannot see inside.



If you take out some marbles with your eyes closed, what is the smallest number of marbles you should take out to make certain that you have **at least**:

- a) 1 red marble b) 1 yellow marble
- c) 2 green marbles
- d) 3 marbles of the same colour?

1

We are going to throw 2 dice at the same time. How many different **totals** could there be? (Note: $1 + 6 = 7$ and $6 + 1 = 7$ so the totals are the same)

Continue the list.

1	1
1	2

2	

3	

4	

5	

6	

2

The side of each grid square is a unit. Count the units around the edge of each shape. Write the lengths of the **perimeters** in the boxes below.

A: units B: units C: units
 D: units E: units F: units

3

Practise calculation.

- a) $37 + 56 =$ $25 + 47 =$ $69 + 18 =$
- b) $91 - 23 =$ $87 - 54 =$ $38 - 19 =$
- c) $7 \times 10 =$ $3 \times 6 =$ $9 \times 8 =$
- d) $36 \div 6 =$ $25 \div 5 =$ $81 \div 9 =$
- e) $3 \times 4 + 20 \div 5 =$ $49 - 42 \div 7 + 10 \times 0 =$

1



Mrs Hedgehog and Mrs Squirrel always take the same number of strawberries home for their babies.



There are 8 baby hedgehogs and 4 baby squirrels. How many strawberries will each baby get? Complete the table.

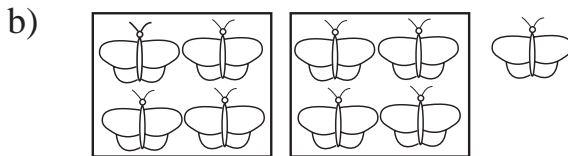
taken home	8	24	40			16		80		64
per baby	2			8						
per baby	1				6		7		9	

2

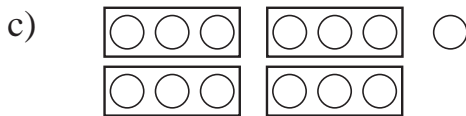
Write a division about each picture. Check with a multiplication.



.....



.....

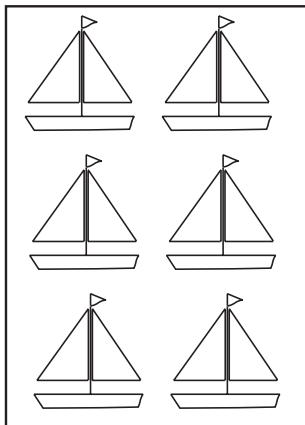


.....


3

Colour the amount asked for in each picture.


a) 1 half



b) 1 third



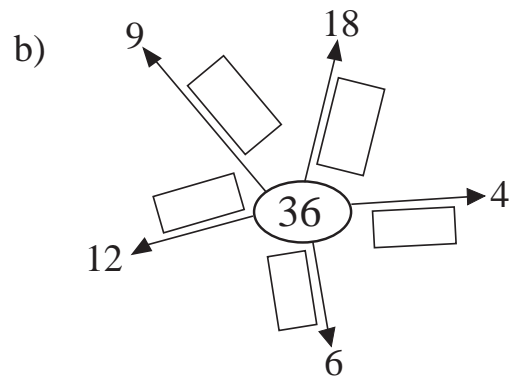
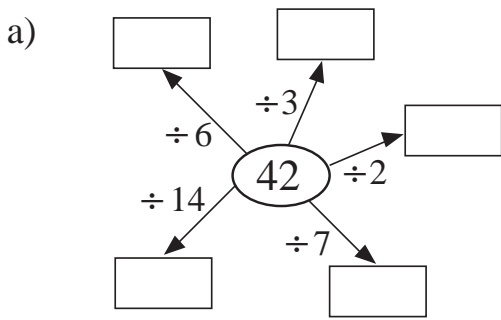
c) 4 sixths



d) Draw 10 marbles. Colour 2 fifths of them red.

1

Fill in the missing numbers and signs. (+, -, ×, ÷)



2

Pete has 48 stamps, 8 times more than the number Laura has.

a) How many stamps does Laura have?

Calculation:

--	--	--	--	--	--	--

Answer:

.....

b) How many stamps do they have altogether?

Calculation:

--	--	--	--	--	--	--	--

Answer:

.....

3

Practise division. Check with multiplication.

a) $17 \div 2 = \square$
 remainder \square

Check

--

$22 \div 2 = \square \square$
 remainder \square

Check

--

$14 \div 2 = \square$
 remainder \square

Check

--

b) $28 \div 3 = \square$
 remainder \square

Check

--

$36 \div 3 = \square \square$
 remainder \square

Check

--

$18 \div 3 = \square$
 remainder \square

Check

--

c) $41 \div 4 = \square \square$
 remainder \square

Check

--

$32 \div 4 = \square$
 remainder \square

Check

--

$0 \div 4 = \square$
 remainder \square

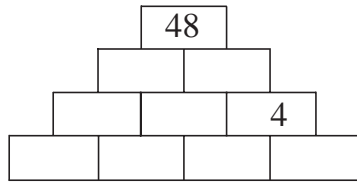
Check

--

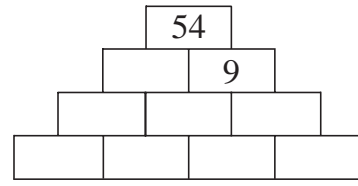
1

Each number is the **product** of the 2 numbers directly below it.
Fill in the missing numbers.

a)

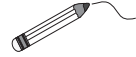


b)



2

Join up the equal pairs.



$42 \div 6 + 1$

3 quarters of 12

$26 \div 2 - 3$

1 half of 8

1 quarter of 40

1 third of 24

$35 \div 7 - 1$

2 thirds of 15, minus 1

3

Practise division. Check with multiplication.

a) $16 \div 5 = \square$
remainder \square
Check

$60 \div 5 = \square \square$
remainder \square
Check

$40 \div 5 = \square$
remainder \square
Check

b) $34 \div 6 = \square$
remainder \square
Check

$48 \div 6 = \square$
remainder \square
Check

$66 \div 6 = \square \square$
remainder \square
Check

c) $14 \div 7 = \square$
remainder \square
Check

$57 \div 7 = \square$
remainder \square
Check

$77 \div 7 = \square \square$
remainder \square
Check

4

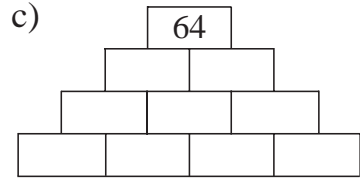
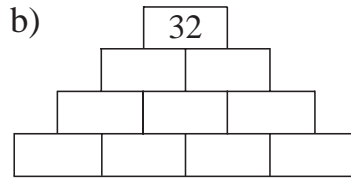
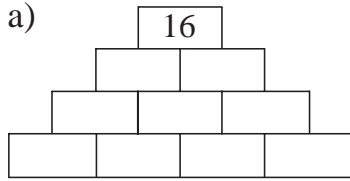
Compare the results. Write the correct sign between them ($<$, $>$, $=$)

a) 14×6 $10 \times 6 + 4 \times 6$ b) 32×3 $30 \times 3 + 2$

9×14 $9 \times 7 + 9 \times 7$ 17×4 $8 \times 4 + 8 \times 4$


1

Each number is the **product** of the 2 numbers directly below it. Fill in the missing numbers.



2

Four ladybirds are sharing 22 leaves so that they all have an equal amount. How many leaves will each ladybird get and how many will remain?



$$\begin{array}{ccc} \square & \square & \div 4 = \square \\ \text{remainder} & & \square \end{array}$$

Check: $4 \times \square + \square = 22$

Answer:

3

Practise division. Check with multiplication.

a) $26 \div 8 = \square$
 remainder \square
Check

$49 \div 8 = \square$
 remainder \square
Check

$72 \div 8 = \square$
 remainder \square
Check

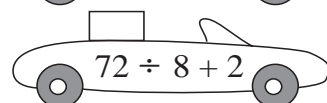
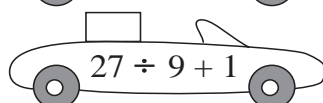
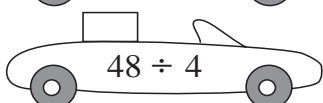
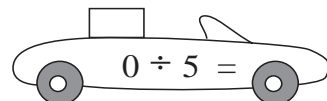
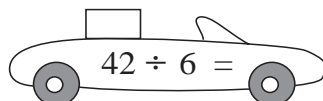
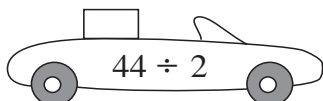
b) $39 \div 9 = \square$
 remainder \square
Check

$81 \div 9 = \square$
 remainder \square
Check

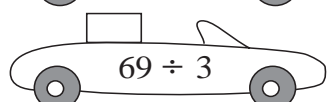
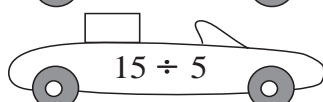
$99 \div 9 = \square \square$
 remainder \square
Check

4

In which order will the cars pass the finishing line? Write the position numbers in the boxes. The car with the highest value will be 1st!




Write the values in **decreasing** order.



..... < < < < < <

1

There are 13 fish in a tank. Three fish at a time can be lifted out with a small net.



How many times does the net have to be used to lift all the fish out of the tank?

Calculation:

Answer:

2

Do the calculations in the correct order.

a) $12 - 3 \times 2 + 1 = \square$	b) $12 + 3 \times 2 - 1 = \square$
$(12 - 3) \times 2 + 1 = \square$	$(12 + 3) \times 2 - 1 = \square$
$12 - 3 \times (2 + 1) = \square$	$12 + 3 \times (2 - 1) = \square$
$(12 - 3) \times (2 + 1) = \square$	$(12 + 3) \times (2 - 1) = \square$
$12 - (3 \times 2 + 1) = \square$	$12 + (3 \times 2 - 1) = \square$

3

Compare the results. Write the correct sign between them (<, >, =)

a) $13 \times 7 \square 10 \times 7 + 3 \times 7$	b) $21 \times 4 \square 20 \times 4 + 1$
$8 \times 12 \square 8 \times 6 + 8 \times 6$	$18 \times 3 \square 9 \times 3 + 9 \times 3$
$16 \times 5 \square 10 \times 5 + 6$	$7 \times 12 \square 7 \times 10 + 7 \times 2$
$6 \times 13 \square 5 \times 13 + 1$	$19 \times 5 \square 20 \times 5 - 5$
$2 \times 24 \square 4 \times 12$	$27 \times 3 \square 30 \times 3 - 3 \times 3$

4

Practise division. Check with multiplication.

a) $25 \div 10 = \square$	b) $81 \div 10 = \square$	c) $60 \div 10 = \square$
remainder \square	remainder \square	remainder \square
<i>Check</i>	<i>Check</i>	<i>Check</i>
<input type="text"/>	<input type="text"/>	<input type="text"/>

1

Write these numbers in the correct places in the two tables.

33, 39, 42, 56, 60, 72, 89, 100,
121, 110, 137, 143, 159, 164, 177, 181, 199, 200

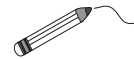
1	2	3	4	5	6	7	8	9	10
11	12	13	14	15	16	17	18	19	20
21	22	23	24	25					
31									
							49		
			55						
	62								
				76					
81									
							99		

101	102	103				107			
111			114						120
	122							129	
				135					140
						147			
		153		156					
161								169	
									180
							188		
191				195					

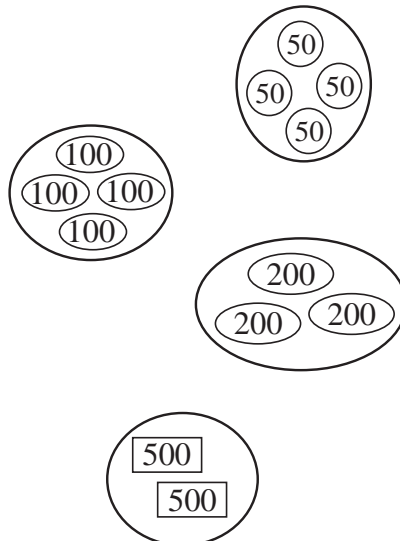
- a) How many 10's are in 100?
- b) How many 100's are in 200?

2

Join up the amounts in the middle to the matching numbers.



- one hundred
- two hundred
- three hundred
- four hundred
- five hundred
- six hundred
- seven hundred
- eight hundred
- nine hundred
- one thousand



- $1 \times 100 = 100$
- $2 \times 100 = 200$
- $3 \times 100 = 300$
- $4 \times 100 = 400$
- $5 \times 100 = 500$
- $6 \times 100 = 600$
- $7 \times 100 = 700$
- $8 \times 100 = 800$
- $9 \times 100 = 900$
- $10 \times 100 = 1000$

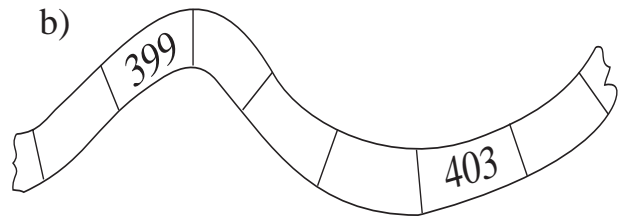

3

Colour in the number you think is the odd one out. Why did you choose it?

- a) 24 98 137 67 45
- b) 137 210 150 111 156

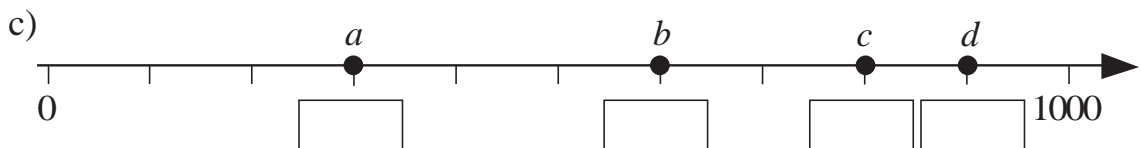
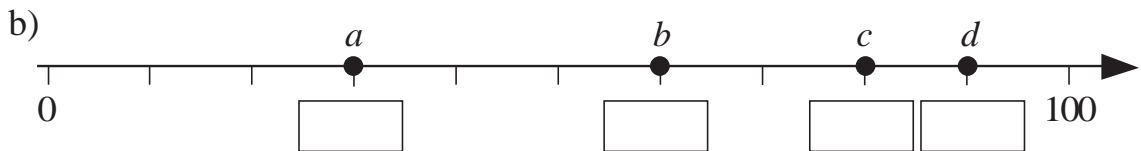
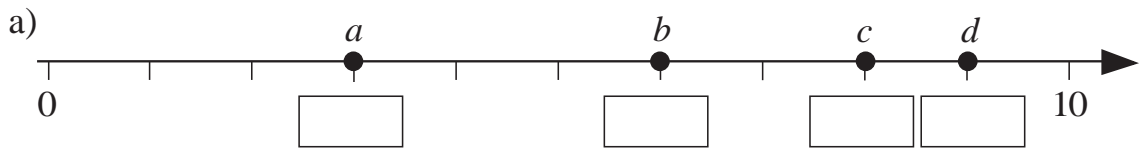
1

Write in the missing numbers.



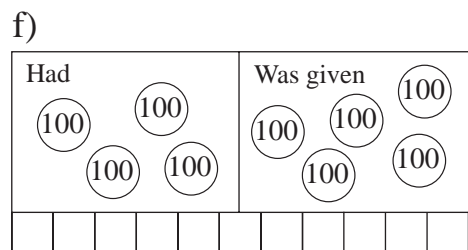
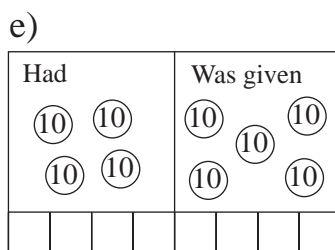
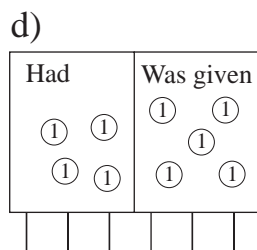
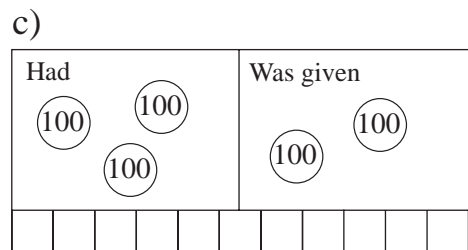
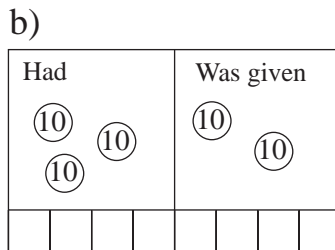
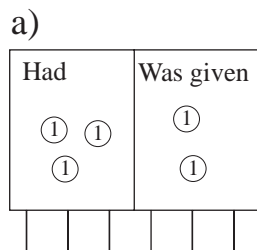
2

At which numbers have we written the letters? Write them in the boxes.



3

Write additions about the pictures.



4

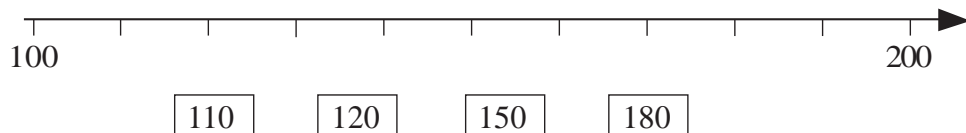
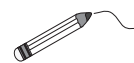
Join up the numbers to the number line.

130

140

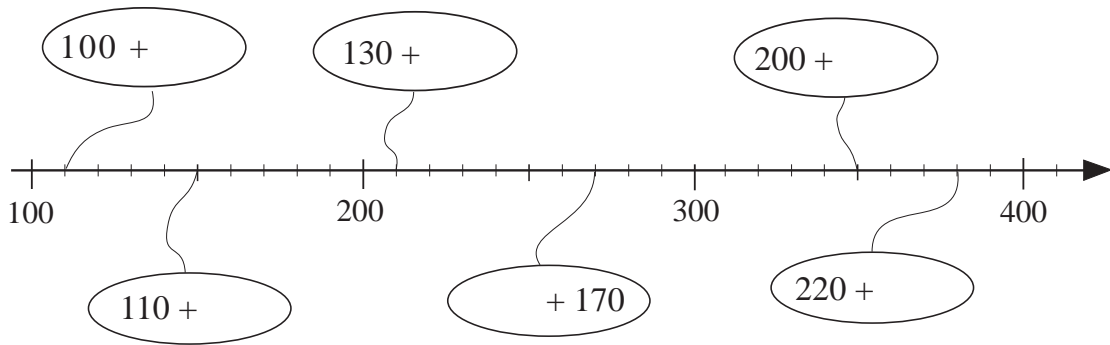
170

190



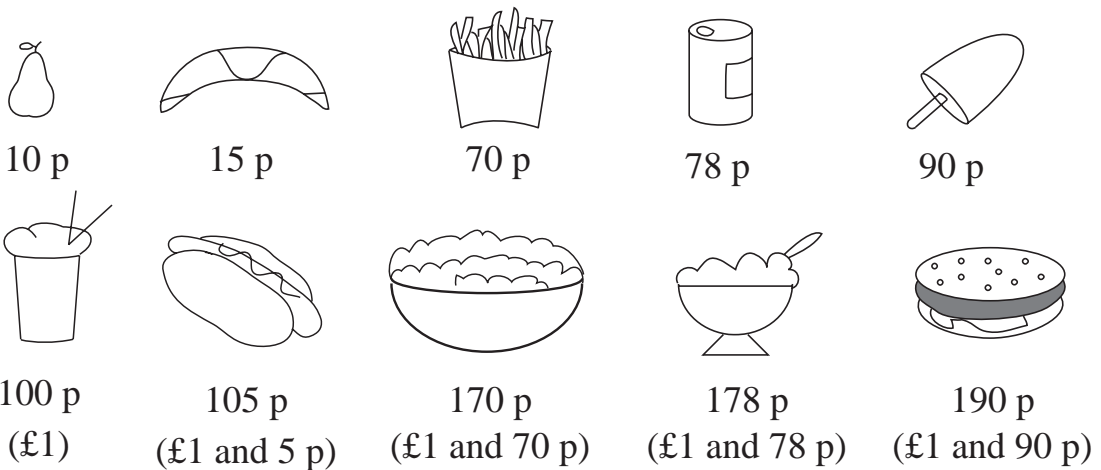
1

Fill in the missing numbers.



2

Colour the items we can pay for exactly with only 10 p coins.



3

Practice addition and subtraction.

- a) $100 + 80 =$ b) $130 - 20 =$
- $100 + 8 =$ $230 - 20 =$
- $100 + 88 =$ $147 - 7 =$
- $100 + 55 =$ $147 - 40 =$
- $300 + 67 =$ $147 - 47 =$
- $300 + 84 =$ $134 - 34 =$
- $130 + 20 =$ $256 - 56 =$
- $130 + 2 =$ $100 + 50 + 3 =$

1

Write these numbers using digits.

- a) Three hundred and fifty

--	--	--
- b) Two hundred

--	--	--
- c) Four hundred and fifty

--	--	--
- d) Six hundred

--	--	--
- e) Eight hundred and fifty

--	--	--
- f) Nine hundred and fifty-two

--	--	--

2

Write additions and subtractions about the pictures.

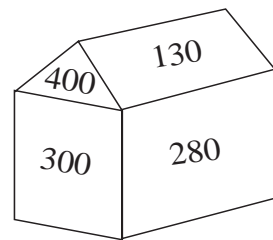
a)

b)

3

Colour the parts of the house as shown.

- Red: $180 - 50$ Yellow: $300 + 100$
 Blue: $210 + 70$ Green: $500 - 200$



4

Write below each figure its total value if: $\bigcirc = 10$, $\triangle = 50$, $\square = 100$

a)

--	--	--

b)

--	--	--

c) Draw a figure of total value 370.

1

Complete the table.

Hundreds	Tens	Units	Number in digits	Number in words
	⑩ ⑩	① ① ① ① ① ①	26	twenty-six
①00	⑩ ⑩	① ① ① ① ① ①		one hundred and twenty-six
①00 ①00	⑩ ⑩	① ① ① ① ① ①	226	
①00 ①00 ①00	⑩ ⑩	① ① ① ① ① ①		
			526	

2

In how many different ways could we pay these amounts?

Complete the table.

	⑩p	50p	£1	£10	£20
£2	20	—	—	—	—
£2	—	4	—	—	—
£2					
£23					
£23					
£23					

3

Which of these could you buy? Draw pictures and write additions.



£1



50 p



70 p



20 p

= 90 p	= £1 50 p	= £2 10 p	= £1 20 p

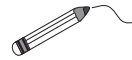
1

Write the total amount below each column.

<p>a)</p> <p>(100)</p> <p>(100)</p> <p>(100) (1)</p> <p>(100) (10) (1)</p> <p>(100) (10) (1)</p> <p>□ □ □</p>	<p>b)</p> <p>(1)</p> <p>(10) (1)</p> <p>(10) (1)</p> <p>(100) (10) (1)</p> <p>(100) (10) (1)</p> <p>□ □ □</p>	<p>c)</p> <p>(100)</p> <p>(100)</p> <p>(100) (1)</p> <p>(100) (1)</p> <p>□ □ □</p>	<p>d)</p> <p>(100)</p> <p>(100) (10)</p> <p>(100) (10)</p> <p>(100) (10)</p> <p>(100) (10)</p> <p>□ □ □</p>
--	---	--	---

2

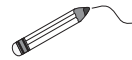
Join up the equal numbers.



one hundred and thirty-six	(136)	(316)	one hundred and sixty-three
one hundred and thirty	(163)	(211)	three hundred and sixteen
three hundred and one	(130)	(103)	one hundred and twelve
one hundred and three	(301)	(112)	two hundred and eleven

3

Join up the equal amounts.



500 + 130		120 + 90
850 - 300		400 - 300
800 - 10		520 - 100
50 + 250		100 + 20

4

Complete the table. The rule is: □ - △ = ○.


□	£1	£3	90 p	2 litres			1 kg	£9 10 p	4 litres 30 cl
△	10 p	70 p			20 cm	60 cm	200 g	£8	1 litres 30 cl
○			70 p	20 cl	1 m	2 m 40 cm			

△ =

□ =

1

Bob has only £5 notes in his wallet. He is thinking of buying one of these.



Buying which item would give him

- a) **most** change back? *Change* :
- b) **least** change back? *Change* :

2

Write the additions and subtractions in a shorter way. Write the answers too.

- a) $80 + 80 + 80 = \dots\dots\dots$
- b) $25 + 25 + 25 + 25 + 25 + 25 + 25 = \dots\dots\dots$
- c) $70 + 70 = \dots\dots\dots$
- d) $100 + 100 + 100 + 100 = \dots\dots\dots$
- e) $250 + 250 = \dots\dots\dots$
- f) $120 - 30 - 30 - 30 = \dots\dots\dots$
- g) $150 - 50 - 50 - 50 = \dots\dots\dots$

3

Write in the missing numbers.

- a) $60 \xrightarrow{+20} \square \xrightarrow{-10} \square \xrightarrow{+70} \square \xrightarrow{-50} \square$
- b) $56 \xrightarrow{+28} \square \xrightarrow{-15} \square \xrightarrow{+70} \square \xrightarrow{-50} \square$
- c) $170 \xrightarrow{-30} \square \xrightarrow{-60} \square \xrightarrow{+50} \square \xrightarrow{-80} \square$
- d) $176 \xrightarrow{-30} \square \xrightarrow{-60} \square \xrightarrow{+80} \square \xrightarrow{-50} \square$

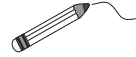
4

How many 40 cl jars can be filled from a 3 litre 20 cl tub of honey?

Answer: jars

1

Join each cloud to the corresponding point on the number line.



$70 + 80$

$100 + 250$

$310 + 120$



$680 - 40$

$750 - 50$

$320 - 120$

2

Fill in the missing numbers.

a) $4\text{ m } 26\text{ cm} = \square\square\square\text{ cm}$

b) $\square\text{ m } \square\square\text{ cm} = 317\text{ cm}$

$\pounds 1\ 40\text{ p} = \square\square\square\text{ p}$

$\pounds \square \square\square\text{ p} = 145\text{ p}$

$2\text{ litres } 81\text{ cl} = \square\square\square\text{ cl}$

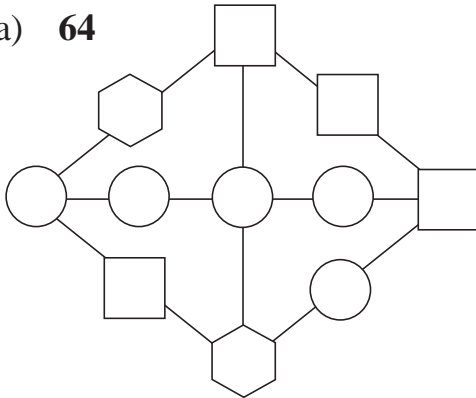
$\square\text{ litre } \square\square\text{ cl} = 450\text{ cl}$

3

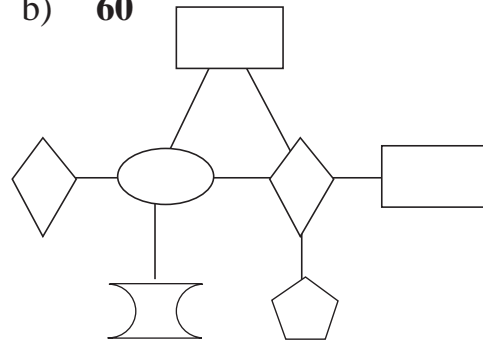
The same shape stands for the same 1-digit number greater than 1.

Fill in the numbers if the **product** of the numbers along each line equals:

a) **64**



b) **60**



4

Use this **code** to write secret messages.

Secret code

a) **Code** this secret message.

m e e t m e a t t e n
 □ □ □ □ □ □ □ □ □ □ □ □

a	b	e	h	i	m	n	o	s	t
↓	↓	↓	↓	↓	↓	↓	↓	↓	↓
0	1	2	3	4	5	6	7	8	9

b) **Decode** this secret message.

□ □ □ □ □ □ □ □ □ □ □ □
 1 2 6 4 8 6 7 9 3 7 5 2

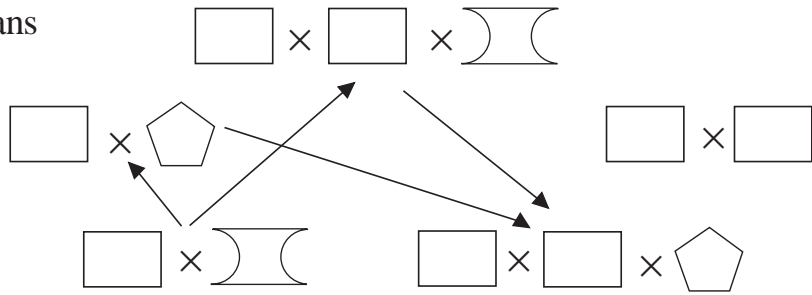
c) **Code** your own secret message for a friend to **decode**.

1

Which of the numbers 2, 5 or 10 does each shape represent?

The same shape means the same number.

The arrows point to the multiplication which has **twice** the value.



2

Practise multiplication.

- | | | |
|----------------|----------------|----------------|
| a) [] = 6 × 1 | b) [] = 3 × 8 | c) [] = 3 × 4 |
| [] = 9 × 3 | [] = 8 × 5 | [] = 6 × 4 |
| [] = 10 × 0 | [] = 6 × 0 | [] = 3 × 5 |
| [] = 1 × 5 | [] = 10 × 4 | [] = 5 × 0 |
| [] = 5 × 2 | [] = 3 × 3 | [] = 35 × 2 |
| [] = 17 × 2 | [] = 23 × 2 | [] = 10 × 10 |

3

Practise division.

- | | | |
|-------------------|-----------------|-----------------|
| a) 12 ÷ 2 = [] | b) 6 ÷ 3 = [] | c) 56 ÷ 7 = [] |
| 27 ÷ 3 = [] | 15 ÷ 5 = [] | 9 ÷ 1 = [] |
| 35 ÷ 7 = [] | 40 ÷ 8 = [] | 0 ÷ 4 = [] |
| 63 ÷ 9 = [] | 70 ÷ 7 = [][] | 4 ÷ 2 = [] |
| 100 ÷ 10 = [][] | 8 ÷ 8 = [] | 27 ÷ 3 = [] |
| 72 ÷ 8 = [] | 20 ÷ 4 = [] | 40 ÷ 10 = [] |

4

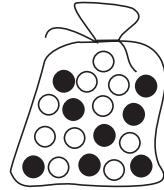
List the numbers which make the statements true.

- a) 6 tens and 5 units < 6 tens and [] units [] :
- b) 7 tens and 6 units ≥ [] tens and 6 units [] :
- c) 2 hundreds, 3 tens and 7 units > [] hundreds, 3 tens and 7 units [] :

1

In a bag, there are 10 white and 8 black marbles.

What is the **smallest** number of marbles you must take out of the bag (with your eyes closed) to make **certain** that you have taken out **at least**:



- | | | | |
|--------------------------------|----------------------|--------------------|----------------------|
| a) 1 white marble | <input type="text"/> | b) 1 black marble | <input type="text"/> |
| c) 5 white marbles | <input type="text"/> | d) 5 black marbles | <input type="text"/> |
| e) 1 white and 1 black marble? | <input type="text"/> | | |

2

Colour the equal amounts in the same colour.

$5 \times 2 + 2 \times 2 =$	$9 \times 7 + 1 \times 7 =$	$6 \times 3 + 6 \times 4 =$
$6 \times 7 + 1 \times 7 =$	$3 \times 2 + 4 \times 2 =$	$5 \times 7 + 2 \times 7 =$
$6 \times 2 + 6 \times 5 =$	$6 \times 6 + 6 \times 1 =$	$9 \times 7 - 2 \times 7 =$

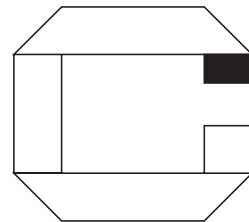
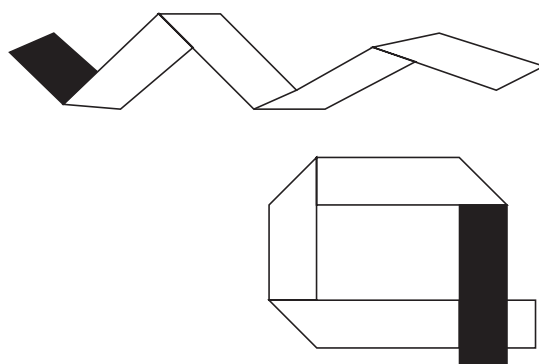
3

Do the calculations in the correct order.

- | | | | | | |
|------------------------|----------------------|----------------------|-------------------------------------|----------------------|----------------------|
| a) $39 + 4 \times 6 =$ | <input type="text"/> | <input type="text"/> | b) $4 \times 7 + 6 \times 8 - 19 =$ | <input type="text"/> | <input type="text"/> |
| $26 + 8 \times 7 =$ | <input type="text"/> | <input type="text"/> | $9 \times 5 - 3 \times 6 + 35 =$ | <input type="text"/> | <input type="text"/> |
| $73 - 5 \times 9 =$ | <input type="text"/> | <input type="text"/> | $72 \div 8 + 7 \times 9 - 27 =$ | <input type="text"/> | <input type="text"/> |
| $95 - 3 \times 9 =$ | <input type="text"/> | <input type="text"/> | $8 \times 8 - 54 \div 6 + 18 =$ | <input type="text"/> | <input type="text"/> |

4

One side of the paper strip is white and the other side is black. Continue colouring the parts of the paper strips which should be black.



1

Colour the odd one out. Write the reason for your choice.

1 third of twelve

1 half of 8

1 quarter of 16

1 sixth of 6

Reason :

2

Fill in the missing numbers.

a) $6 \times \square = 48$	b) $\square \times 8 = 40$	c) $2 \times \square = 4$
$3 \times \square = 27$	$\square \times 10 = 90$	$4 \times \square = 20$
$5 \times \square = 25$	$\square \times 4 = 8$	$5 \times \square = 0$
$4 \times \square = 28$	$\square \times 9 = 54$	$8 \times \square = 64$
$10 \times \square = 60$	$\square \times 8 = 8$	$10 \times \square = 70$
$9 \times \square = 81$	$\square \square \times 2 = 20$	$7 \times \square = 35$

3

Fill in the missing numbers.




a) $9 \div \square = 3$	b) $\square \square \div 5 = 5$	c) $4 \div \square = 4$
$28 \div \square = 4$	$\square \square \div 6 = 8$	$36 \div \square = 6$
$54 \div \square = 9$	$\square \square \div 9 = 9$	$100 \div \square \square = 10$
$70 \div \square \square = 7$	$\square \square \div 10 = 8$	$18 \div \square = 9$
$72 \div \square = 8$	$\square \div 6 = 0$	$24 \div \square = 3$
$18 \div \square = 3$	$\square \square \div 7 = 2$	$45 \div \square = 5$




4

Write the value, in acorns, of each squirrel's store of food, if:

 = 

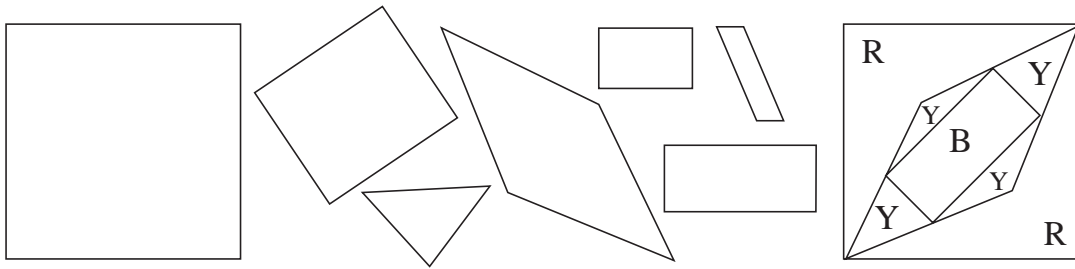
 = 

a)  :  = 

b)  :  = 

11

We have put some of these shapes one on top of the other to give the shape on the right. Colour the shapes we have used in the correct colour.



22

The length of a room is 4 m 30 cm and the width is 2 m 70 cm. What is the difference between them?

Length: = cm Width: = cm

cm = m cm

33

On a farm, each hen lays 1 egg per day. Complete the table.



Number of hens	1	2	2	3	3	4	4	5	10	10
Number of days	1	1	2	2	3	3	5	10	5	10
Number of eggs	1									

44

Do the calculations in the correct order.

a) $12 + 24 \div 6 - 4 = \square$ b) $(12 + 24) \div 6 - 4 = \square$
 $12 + 24 \div (6 - 4) = \square$ $(12 + 24) \div (6 - 4) = \square$
 $12 + (24 \div 6 - 4) = \square$ $12 + (24 \div 6 - 4) = \square$

55

In a card game, the cards have pictures of apples, pears, cherries and bananas. The rules are:

$3 \text{ pear} = 1 \text{ apple}$, $6 \text{ cherry} = 1 \text{ pear}$, $2 \text{ banana} = 1 \text{ cherry}$

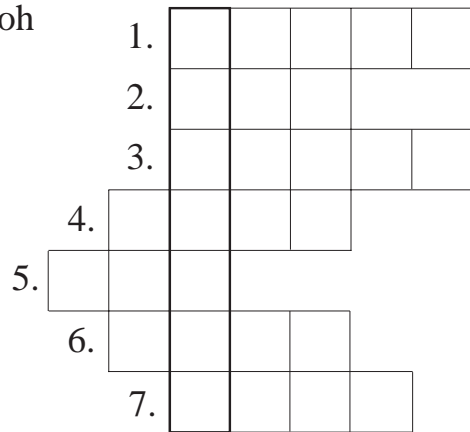
How many bananas are equal to an apple?

Answer: $1 \text{ apple} = \square \text{ banana}$

1

Fill in the grid using the clues given. Write the answers in words.

1. The favourite food of Winnie the Pooh
2. Half of two
3. A yellow, sour fruit
4. The number of fingers on one hand
5. $2 \dots\dots 3 = 5$
6. The subject this lesson is about
7. 12 months

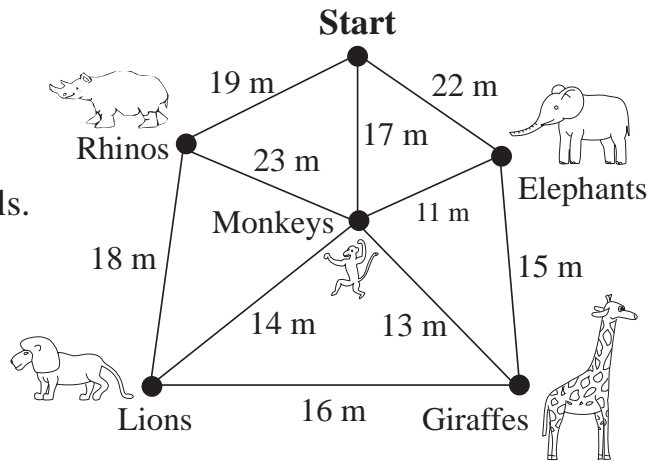


2

You are visiting a zoo and you want to see **all** the animals.

The map shows the paths and the distances between the animals.

Begin and end at **Start**.



- a) Find a route.
List all the animals in the order you visit them.

.....

The total length of this route is metres.

- b) Try to find a route of length less than 100 metres. The order is

.....

The total length of this route is metres.

3

This is a **maze**.

Find a route from the entrance to the dot at the centre without crossing over any lines.

Try to find a shorter path.

