

## CoEA Module 2      Sample Aural Test 2A (Assessed Objective 2)

---

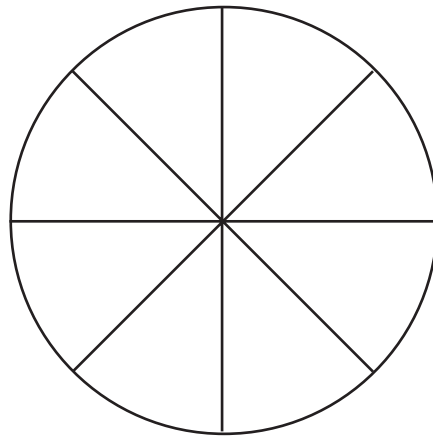
1. Find the cost of 7 sweets at 8p each. (56p)
  
2. A bill comes to £2.93. If you pay the bill with a £5 note how much change will you have? (£2.07)
  
3. How many 20p sweets can I buy with 80p? (4)
  
4. How many 5p coins do you need to make a total of 75p? (15)
  
5. There are 457 people at a football match. Write down the number of people to the nearest 10. (460)
  
6. Look at Diagram 1 on the *Information Sheet*. Shade  $\frac{1}{4}$  of the circle. (Shade any two wedges)
  
7. Write down the answer to 6 times 9. (54)
  
8. Look at the three decimal numbers in List 1 on the *Information Sheet*. Write down the largest. (4.05)
  
9. Find  $\frac{1}{2}$  of £14. (£7)
  
10. Look at the numbers in List 2 on the *Information Sheet*. Write down the value of the 6 in each of these numbers. (6, accept 'units')

# CoEA Module 2      Sample Aural Test 2A (Assessed Objective 2)

---

## Information Sheet

**Diagram 1**



**List 1**

4.009,      4.05,      4.018

**List 2**

86,      476,      2106

## CoEA Module 2      Sample Aural Test 2B (Assessed Objective 2)

---

1. Find the cost of 3 pens at 15p each. (45p)
2. A bill comes to £3.67. If you pay the bill with a £5 note how much change will you have? (£1.33)
3. How many 25p stamps can I buy with a £2 coin? (8)
4. How many 50p coins do you need to make a total of £4.00? (8)
5. There are 2762 people at a football match. Write down the number of people to the nearest 100. (2800)
6. Look at Diagram 1 on the *Information Sheet*. Shade  $\frac{1}{2}$  of the circle. (Shade any two wedges)
7. Write down the answer to 9 times 7. (63)
8. Look at the three decimal numbers in List 1 on the *Information Sheet*. Write down the smallest. (7.73)
9. Find  $\frac{1}{4}$  of £20. (£5)
10. Look at the numbers in List 2 on the *Information Sheet*. Write down the value of the 4 in each of these numbers. (40, accept 'tens')

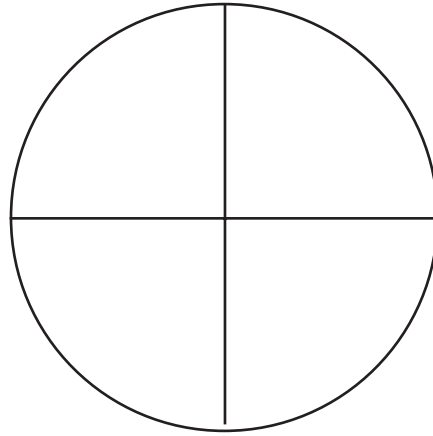
## CoEA Module 2

## Sample Aural Test 2B (Assessed Objective 2)

---

### Information Sheet

#### Diagram 1



#### List 1

7.73, 7.8, 7.79

#### List 2

146, 42, 1049

## CoEA Module 2      Sample Aural Test 2C (Assessed Objective 2)

---

1. Find the cost of 5 oranges at 12p each. (60p)
  
2. A bill comes to £1.76. If you pay the bill with a £5 note how much change will you have? (£3.24)
  
3. How many 15p packets of nails can I buy with 90p? (6)
  
4. How many 20p coins do you need to make a total of £1.40? (7)
  
5. There are 5497 people at a football match. Write down the number of people to the nearest 1000. (5000)
  
6. Look at Diagram 1 on the *Information Sheet*. Shade  $\frac{1}{8}$  of the circle. (Shade any wedge)
  
7. Write down the answer to 8 times 7. (56)
  
8. Look at the three decimal numbers in List 1 on the *Information Sheet*. Write down the smallest. (5.309)
  
9. Find  $\frac{1}{4}$  of £24. (£6)
  
10. Look at the numbers in List 2 on the *Information Sheet*. Write down the value of the 9 in each of these numbers. (90, accept 'tens')

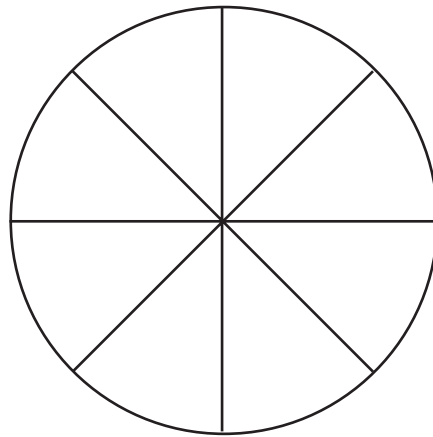
# CoEA Module 2

# Sample Aural Test 2C (Assessed Objective 2)

---

## Information Sheet

### Diagram 1



### List 1

5.309,            5.32,            5.311

### List 2

193,            92,            4590